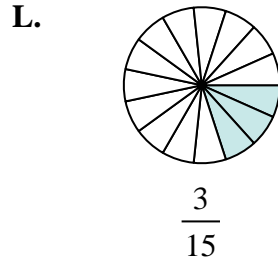
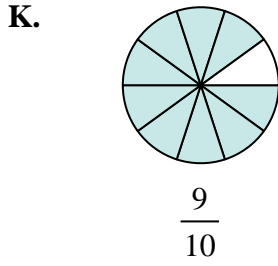
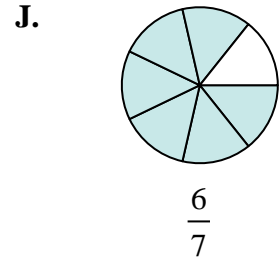
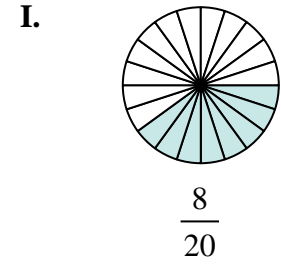
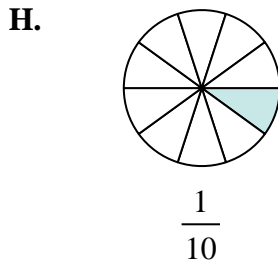
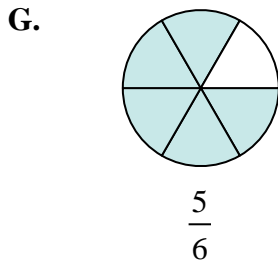
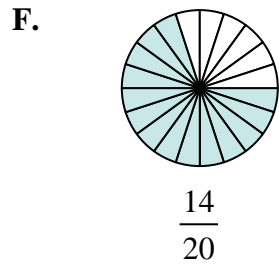
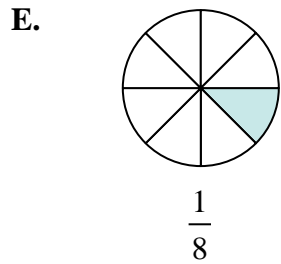
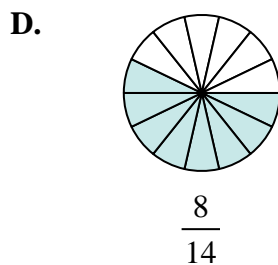
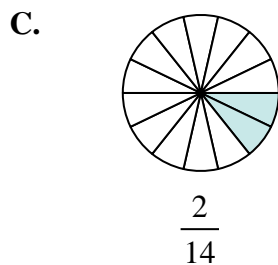
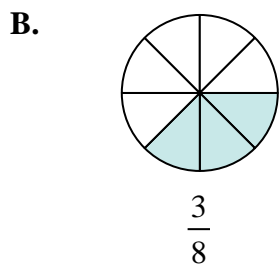
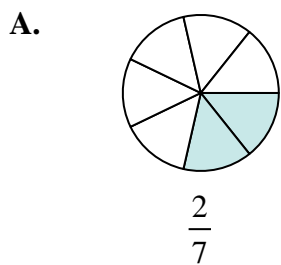
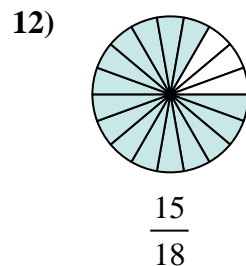
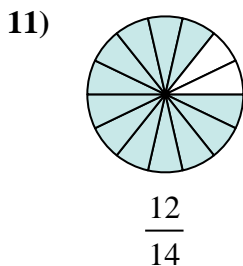
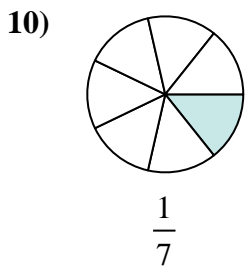
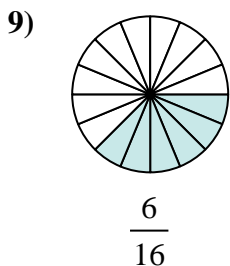
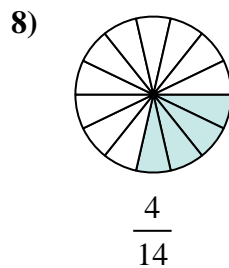
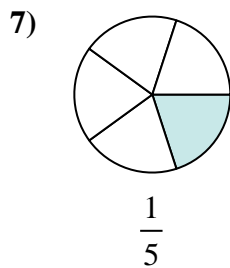
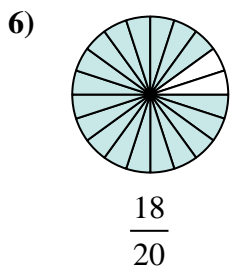
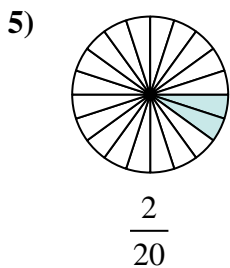
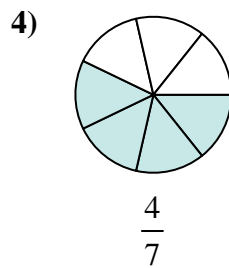
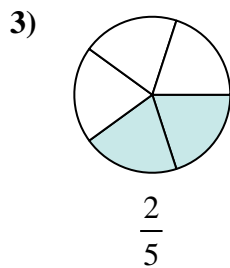
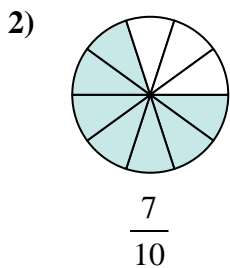
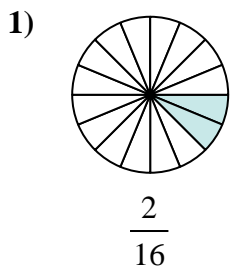




Determine which letter best represents an equivalent fraction.

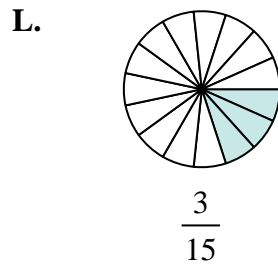
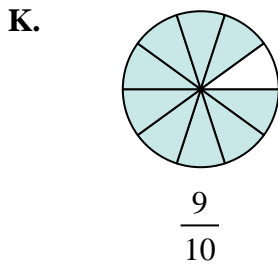
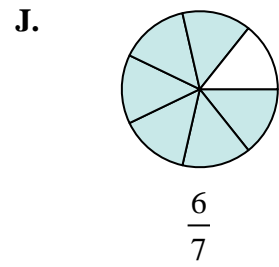
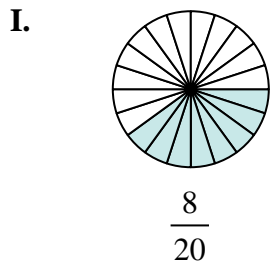
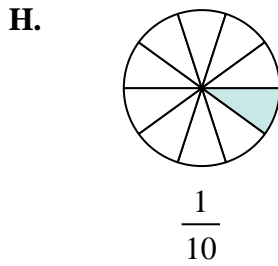
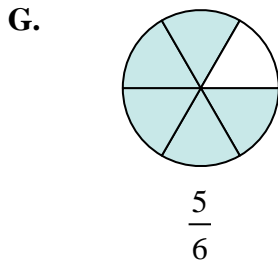
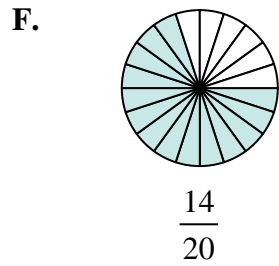
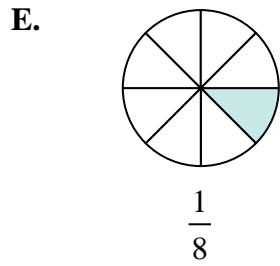
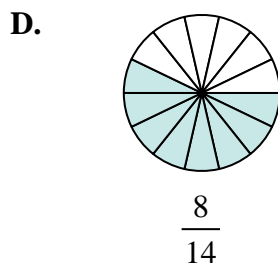
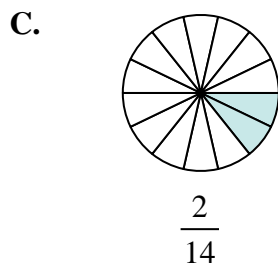
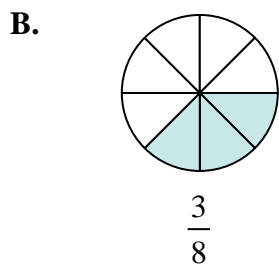
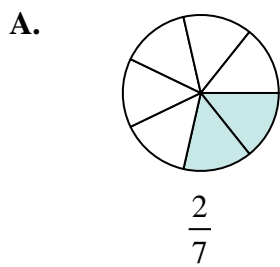
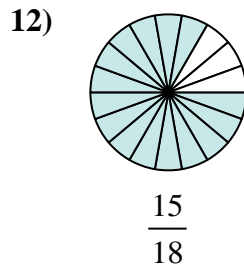
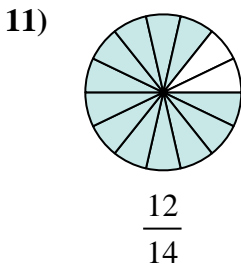
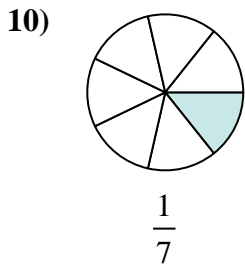
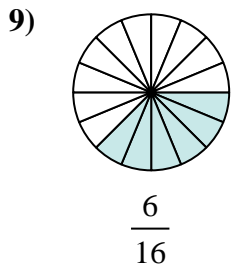
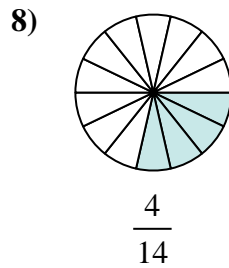
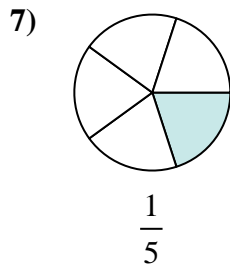
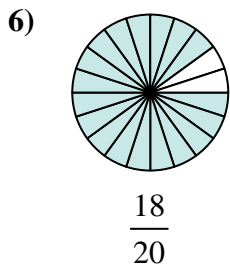
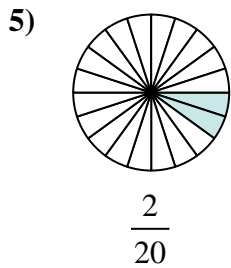
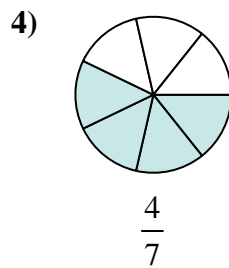
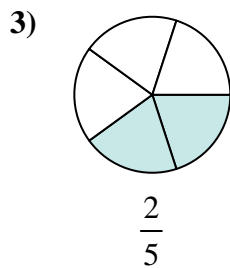
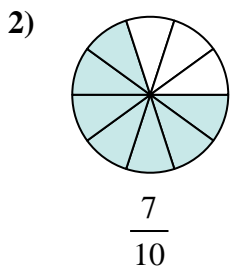
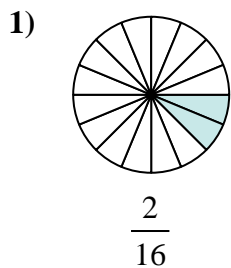
**Answers**



1. \_\_\_\_\_
2. \_\_\_\_\_
3. \_\_\_\_\_
4. \_\_\_\_\_
5. \_\_\_\_\_
6. \_\_\_\_\_
7. \_\_\_\_\_
8. \_\_\_\_\_
9. \_\_\_\_\_
10. \_\_\_\_\_
11. \_\_\_\_\_
12. \_\_\_\_\_



Determine which letter best represents an equivalent fraction.



**Answers**

1. **E**

2. **F**

3. **I**

4. **D**

5. **H**

6. **K**

7. **L**

8. **A**

9. **B**

10. **C**

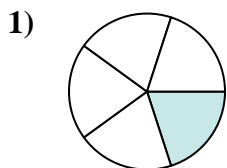
11. **J**

12. **G**

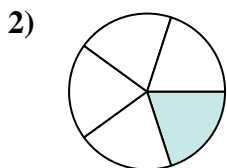


Determine which letter best represents an equivalent fraction.

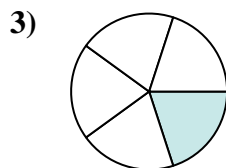
**Answers**



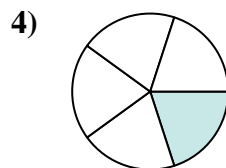
$$\frac{1 \times 3}{5 \times 3}$$



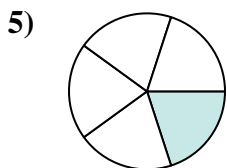
$$\frac{1 \times 3}{5 \times 3}$$



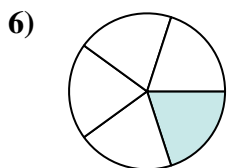
$$\frac{1 \times 3}{5 \times 3}$$



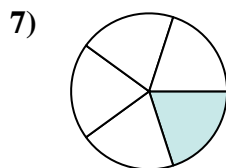
$$\frac{1 \times 3}{5 \times 3}$$



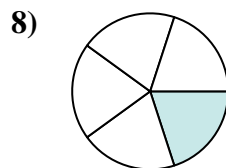
$$\frac{1 \times 3}{5 \times 3}$$



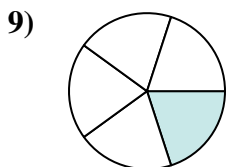
$$\frac{1 \times 3}{5 \times 3}$$



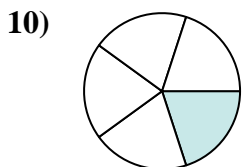
$$\frac{1 \times 3}{5 \times 3}$$



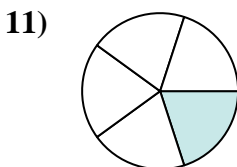
$$\frac{1 \times 3}{5 \times 3}$$



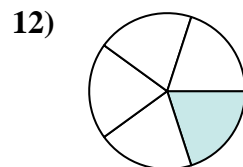
$$\frac{1 \times 3}{5 \times 3}$$



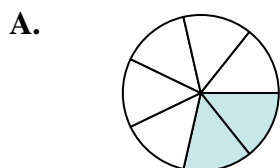
$$\frac{1 \times 3}{5 \times 3}$$



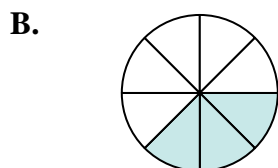
$$\frac{1 \times 3}{5 \times 3}$$



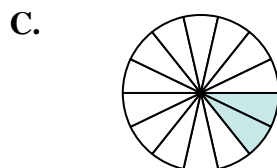
$$\frac{1 \times 3}{5 \times 3}$$



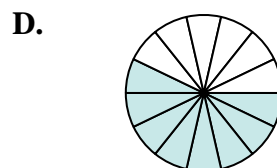
$$\frac{2}{7}$$



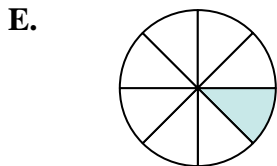
$$\frac{3}{8}$$



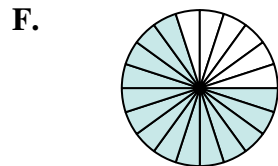
$$\frac{2}{14}$$



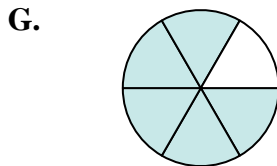
$$\frac{8}{14}$$



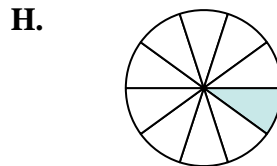
$$\frac{1}{8}$$




$$\frac{14}{20}$$



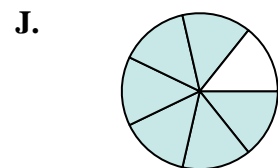
$$\frac{5}{6}$$



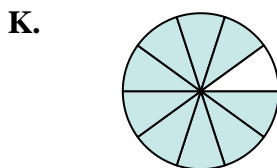
$$\frac{1}{10}$$




$$\frac{8}{20}$$



$$\frac{6}{7}$$



$$\frac{9}{10}$$



$$\frac{3}{15}$$

1. \_\_\_\_\_
2. \_\_\_\_\_
3. \_\_\_\_\_
4. \_\_\_\_\_
5. \_\_\_\_\_
6. \_\_\_\_\_
7. \_\_\_\_\_
8. \_\_\_\_\_
9. \_\_\_\_\_
10. \_\_\_\_\_
11. \_\_\_\_\_
12. \_\_\_\_\_